








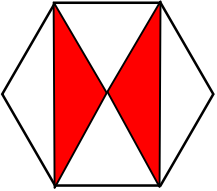
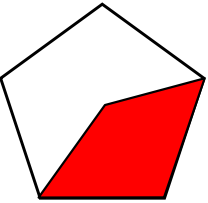
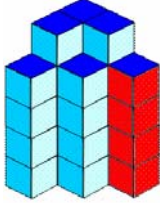
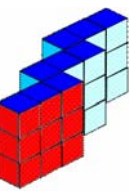

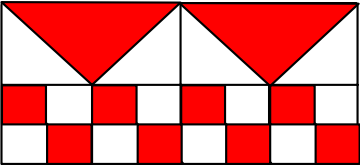
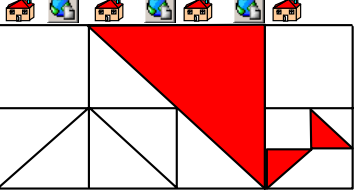
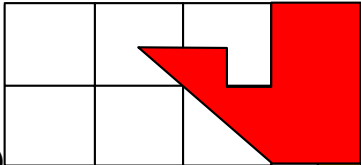
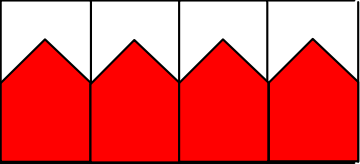
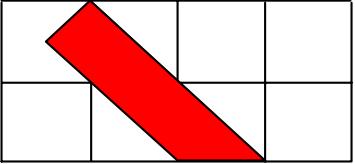
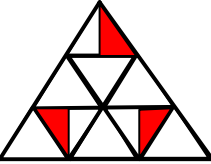
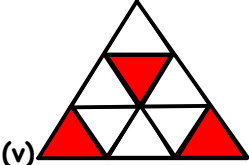
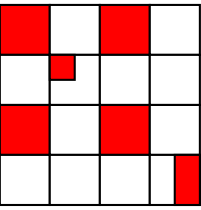

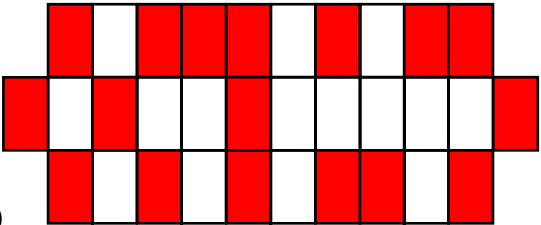
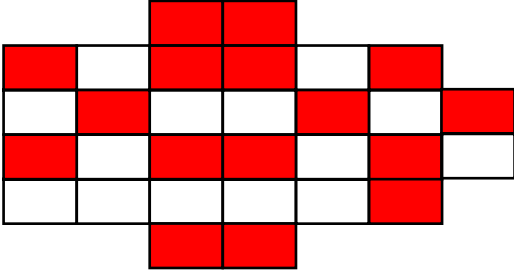


001		Completa la tabla:				1/2E
Conejo	Zanahoria	n° conejos	n° zanahorias	fracción conejos	fracción zanahorias	
		9	3	9/12	3/12	
		6	6	6/12	6/12	

002  ¿Qué parte representa respecto del total la parte rayada u oscura? 1/2/3E
4E

 5	 9	 11	 16
			

004  ¿Qué parte representa respecto del total la parte rayada u oscura? 1E
2E
3E
4E

		
(p)	(q)	(r)
		
(s)	(t)	(u)
		
(v)	(w)	(x)
		
(y)	(z)	

SOLUCIONES EJERCICIO 02

(5) 2/6	(9) 2/5	(11) 4/27	(16) 9/27 ; 1/3
---------	---------	-----------	-----------------

SOLUCIONES EJERCICIO 04

(p) 16/32 ; 1/2	(q) 18/64 ; 9/32	(r) 23/64	(s) 20/32
(t) 7/32 ; 14/64	(u) 3/18	(v) 1/3 = 3/9	(w) 19/64
(x) 51/64	(y) 17/32	(z) 16/30	